

Name \_\_\_\_\_

# Chord Quiz

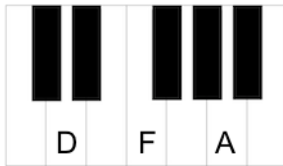
1. Every chord is made up of a Root \_\_\_\_ and \_\_\_\_.

Name the Root, 3rd and 5th in the following chords:

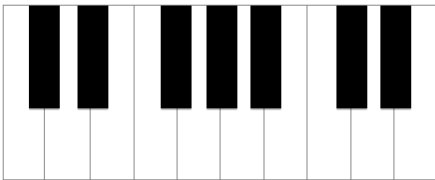
	Root	3rd	5th
2. C:	___	___	___
3. Am:	___	___	___
4. F:	___	___	___
5. G:	___	___	___

Show the three ways to form each chord. Write the letter of each note on the appropriate keys.

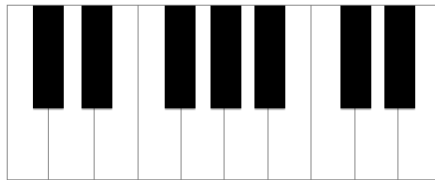
Example:



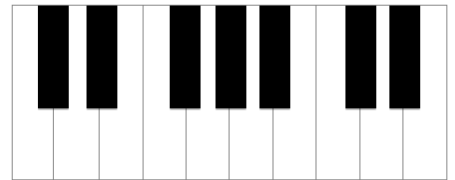
6. C Chord (Root Position)



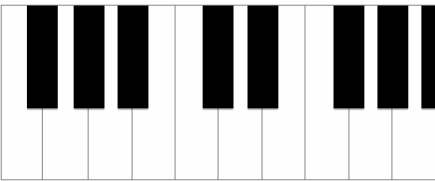
7. C Chord (1st Inverted)



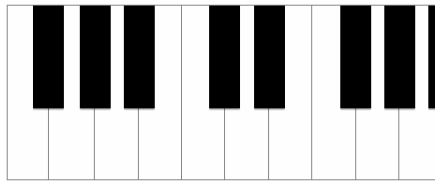
8. C Chord (2nd Inverted)



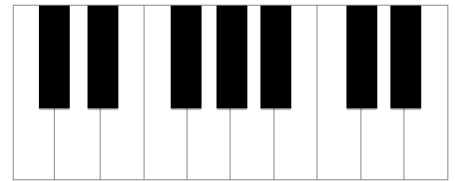
9. G Chord (Root Position)



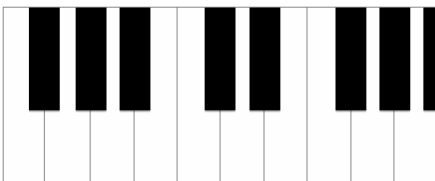
10. G Chord (1st Inverted)



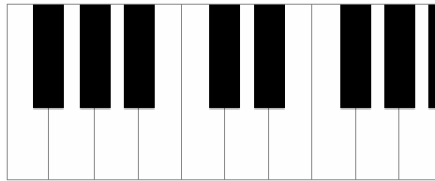
11. G Chord (2nd Inverted)



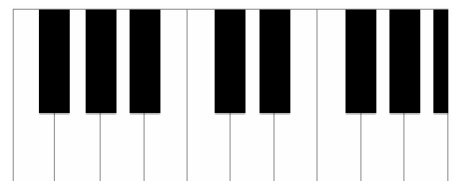
12. F Chord (Root Position)



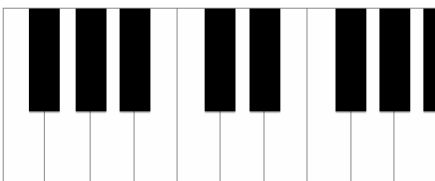
13. F Chord (1st Inverted)



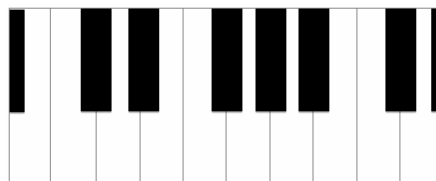
14. F Chord (2nd Inverted)



15. Am Chord (Root Position)



16. Am Chord (1st Inverted)



17. Am Chord (2nd Inverted)

